

# ROCK the FORT




Write which rock you found at each location pictured. There's a total of 25 locations. Good Luck!

 = Location of rock



1. \_\_\_\_\_



2. \_\_\_\_\_



3. \_\_\_\_\_



4. \_\_\_\_\_



5. \_\_\_\_\_



6. \_\_\_\_\_



7. \_\_\_\_\_



8. \_\_\_\_\_




9. \_\_\_\_\_



10. \_\_\_\_\_



11. \_\_\_\_\_



12. \_\_\_\_\_





13. \_\_\_\_\_




14. \_\_\_\_\_



15. \_\_\_\_\_



16. \_\_\_\_\_



17. \_\_\_\_\_



18. \_\_\_\_\_



19. \_\_\_\_\_




20. \_\_\_\_\_



21. \_\_\_\_\_




22. \_\_\_\_\_



23. \_\_\_\_\_



24. \_\_\_\_\_



25. \_\_\_\_\_